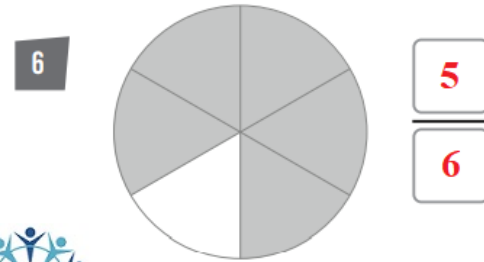
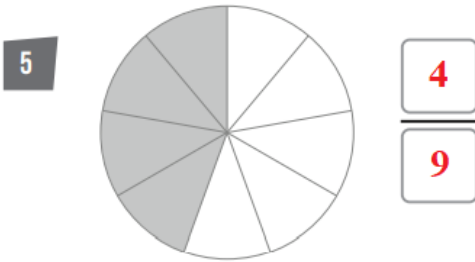
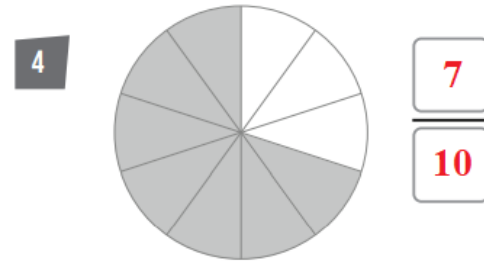
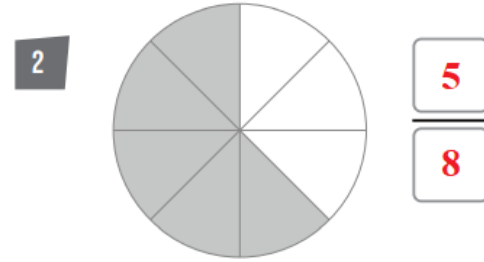
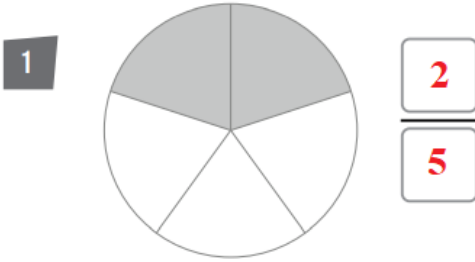


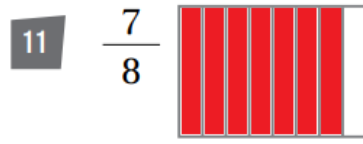
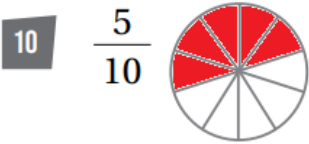
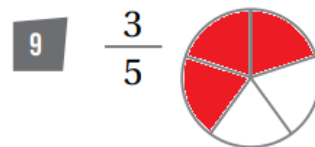
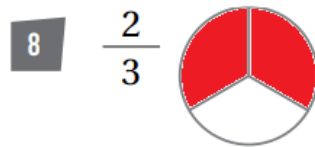
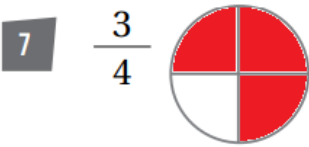
## أسئلة كتاب التمارين الكسر كجزء من كل

اكتب الكسر الذي يمثّل الجزء المُظَلَّل في كل دائرة:

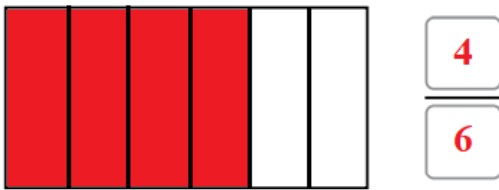
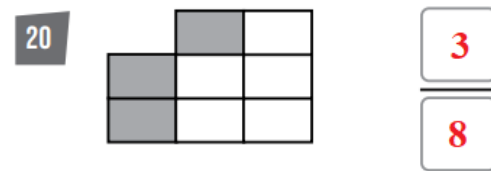
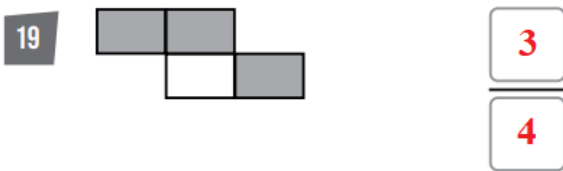
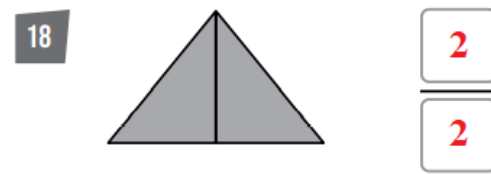
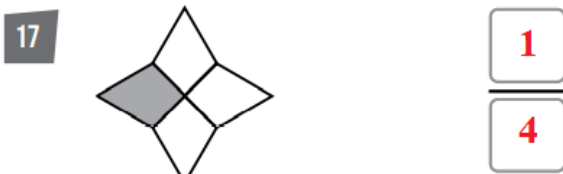
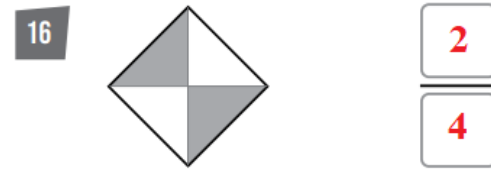
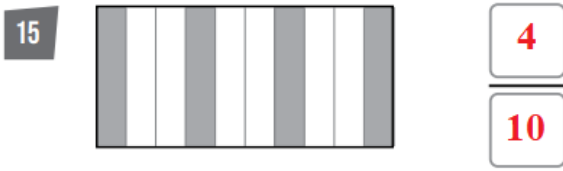
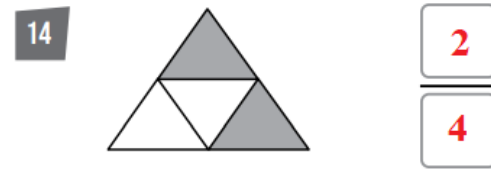
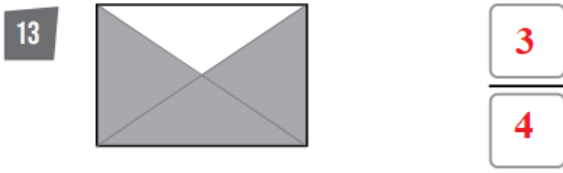


منهاجي

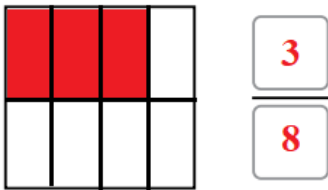
ألون لأمثّل الكسر المُعطى:



اكتب الكسر الذي يمثّل الجزء المُظَلَّل في كلِّ شكل:



21 أُقسِّمُ المُسْتَطِيلَ المُجَاوِرَ إِلَى 6 أَجْزَاءٍ مُتَّابِقَةٍ، ثُمَّ أُلَوِّنُ 4 أَجْزَاءً مِنْهَا، وَأَكْتُبُ الكَسْرَ الدَّالَّ عَلَى الجُزْءِ المُلَوَّنِ.



22 أُقسِّمُ المُرَبَّعَ المُجَاوِرَ إِلَى 8 أَجْزَاءٍ مُتَّابِقَةٍ، ثُمَّ أُلَوِّنُ 3 أَجْزَاءً مِنْهَا، وَأَكْتُبُ الكَسْرَ الدَّالَّ عَلَى الجُزْءِ المُلَوَّنِ.